

MASSACHUSETTS ASSOCIATION OF MATHEMATICS LEAGUES

STATE PLAYOFFS – 2003

Round 1 Arithmetic and Number Theory

1. \_\_\_\_\_
2. \_\_\_\_\_
3. \_\_\_\_\_

1. How many 2-digit prime numbers have the property that the sum of their digits is also a 2-digit prime number?

2. A survey of the 810 graduates of Parallel High School showed that 582 of them had taken at least one foreign language. 209 took French, 244 took German, and 338 took Spanish. Of these numbers 25 took all three, of students that took exactly two languages, 53 took German and Spanish, and 14 more took French and Spanish than took French and German. How many students took both French and Spanish but not German?

3. Let  $A$  and  $B$  be positive digits which are not necessarily distinct. Determine the number of distinct ordered pairs  $(A, B)$  such that  $.\overline{A} + .\overline{B} = .\overline{C} < .99$



MASSACHUSETTS ASSOCIATION OF MATHEMATICS LEAGUES

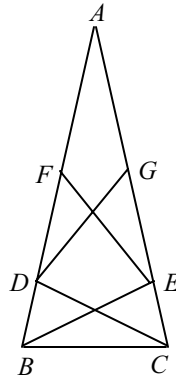
STATE PLAYOFFS – 2003

Round 3 – Geometry

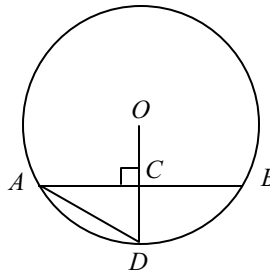
1. \_\_\_\_\_
2. \_\_\_\_\_
3. \_\_\_\_\_

1. In  $\triangle ABC$ ,  $AB = 6$ ,  $BC = 8$ , and  $AC = 10$ .  $\overline{BD}$  is an altitude and point  $E$  is such that  $BECD$  is a rectangle. How many square units are in the area of the rectangle?

2.  $\triangle ABC$  is isosceles and  $AF = AG = FE = GD = DC = EB = BC$ .  
Find  $m \angle A$  in degrees.



3.  $O$  is the center of the circle shown.  
 $OC = 3$  and  $AD = 36$ . Find  $CD$ .







**MASSACHUSETTS ASSOCIATION OF MATHEMATICS LEAGUES**

**STATE PLAYOFFS – 2003**

**Round 6 – Trig and Complex Numbers**

1. \_\_\_\_\_
2. \_\_\_\_\_
3. \_\_\_\_\_

1. Determine, in exact form, the value of  $\sin\left(2\cos^{-1}\frac{3}{8}\right)$ .

2. The combined solutions of the equations  $x^2 - 4x + 8 = 0$  and  $x^2 + 2x + 10 = 0$  are 4 complex numbers, which if graphed, will appear one per quadrant. The product of the solutions in the first and third quadrants can be written as  $a + bi$ . Write that product as the ordered pair  $(a, b)$ .

3. There is a real number  $x$  such that the sides of a triangle have lengths  $\sin x$ ,  $\cos x$ , and  $\tan x$  and the product of the sides is  $1/4$ . Determine the cosine of the largest angle.

MASSACHUSETTS ASSOCIATION OF MATHEMATICS LEAGUES

STATE PLAYOFFS – 2003

Team Round

1. \_\_\_\_\_ 4. \_\_\_\_\_  
2. \_\_\_\_\_ 5. \_\_\_\_\_  
3. \_\_\_\_\_ 6. \_\_\_\_\_

1. Trapezoid  $ABCD$  has bases  $\overline{AB}$  and  $\overline{CD}$  with  $AB < CD$ . Let  $\overline{MN}$  be the median. If  $AB = \log_a b$  and  $CD = \log_{b^2} a$ , determine the greatest lower bound for  $MN$ .
2. A circle with center in the first quadrant is tangent to  $y = x + 10$ ,  $y = x - 6$ , and the  $y$ -axis. Let  $(h, k)$  be the center of the circle. Determine the sum  $h + k$ .
3. Let  $R$  be the region in the first quadrant bounded by the  $x$ - and  $y$ -axis and the graphs of  $f(x) = \frac{9}{25}x + b$  and  $f^{-1}(x)$ . If the area of  $R$  is 49, determine the value of  $b$ .
4. Determine all values of  $p$  such that there is no real solution to the following system:  
$$x^2 + y^2 = 32 \text{ and } (x - p)^2 + (y - p)^2 = 128.$$
5. Two complex numbers  $a + bi$  and  $c + di$  are almost conjugates if and only if  $|a - c| \leq 1$  and  $|b + d| \leq 1$ . Determine the almost conjugate of  $2 + 3i$  that is furthest from the origin.
6. Determine the sum of all integer palindromes between 10,000 and 99,999 that are divisible by 25.

MASSACHUSETTS ASSOCIATION OF MATHEMATICS LEAGUES

STATE PLAYOFFS – 2003

***Answer Sheet***

**Round 1**

1. 5
2. 60
3. 28

**Round 2**

1. 18
2. (2, 3)
3. 65

**Round 3**

1.  $\frac{768}{25}$  or 30.72
2.  $\frac{180}{7}$
3. 24

**Round 4**

1.  $\frac{3}{5}$
2.  $-\frac{2}{7} \leq x \leq \frac{2}{3}$
3. (192, 6144)

**Round 5**

1. (6, -1, 10)
2.  $8 + 8\sqrt{2}$
3.  $k > \frac{1}{2}$

**Round 6**

1.  $\frac{3\sqrt{55}}{32}$
2. (4, -8)
3.  $-\frac{\sqrt{3}}{6}$

**Team**

1.  $\frac{\sqrt{2}}{2}$
2.  $2 + 8\sqrt{2}$
3.  $\frac{28}{5}$
4.  $p < -12$  or  $-4 < p < 4$  or  $p > 12$
5.  $3 - 4i$
6. 1,100,000



MASSACHUSETTS ASSOCIATION OF MATHEMATICS LEAGUES

STATE PLAYOFFS – 2003 – Solutions Outline

Round 1 Arithmetic and Number Theory

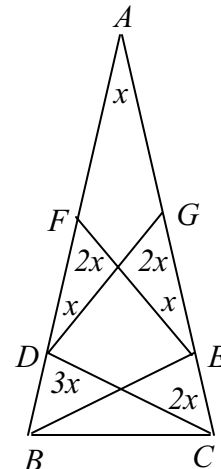
- 29, 47, 67, 83, 89
- Let  $x = \#$  taking F & G, f, only French, g, only German, and s, only Spanish. Now  $f + 2x + 39 = 209$ ,  $g + x + 78 = 244$ ,  $s + x + 92 = 338$ , and  $f + g + s + 2x + 92 = 582$ . Subtracting the first from the last gives  $g + s = 320$  and subtracting the second from the third gives  $s - g = 80$ .
- We have  $\frac{A}{9} + \frac{B}{9} = \frac{C}{9}$ , giving  $A + B = C$  for  $2 \leq C < 9$ . For  $A = 1, 2, 3, 4, B = 1, 2, 3, 4$  giving  $4 \cdot 4 = 16$  ordered pairs. For  $A = 5, B = 1, 2, 3$ ; for  $A = 6, B = 1, 2$ ; and for  $A = 7, B = 1$ . Since each of these pairings can be reversed, i.e.  $(5, 1)$  also gives  $(1, 5)$ , we have a total of  $16 + 6 + 4 + 2 = 28$  ordered pairs.

Round 2 Algebra 1

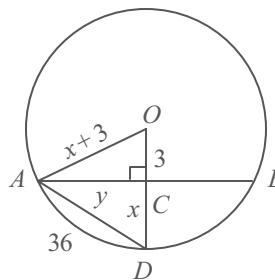
- $5n + 10d = 235, 2d = 3n + 3$
- $7a + b = 5b + a \rightarrow 6a = 4b \rightarrow a = \frac{2}{3}b$ , only possibility is  $b = 3$
- Let  $A = 10a + b$  and  $B = 10b + a$ . Then  $(10a + b)^2 - (10b + a)^2 = 99a^2 - 99b^2 = 9 \cdot 11(a^2 - b^2)$ .  
For the left side to be a perfect square,  $a^2 - b^2$  must equal  $11m^2$ . If  $m = 1$ , then  $a = 6$  and  $b = 5$ .  
If  $m = 2$ , there are no digits satisfying the equation. Thus,  $A = 65$ .

Round 3 – Geometry

- $BD = \frac{24}{5}; DC = \frac{32}{5}$
- Let  $m\angle A = x$ . Since  $AF = FE$ ,  $m\angle FEA = x$ . By the Exterior Angle Theorem,  $m\angle DFE = x + x = 2x$ .  
Similarly,  $m\angle DGC = 2x$ . Since  $DG = DC$ , then  $m\angle DCG = 2x$ . Thus,  $m\angle GDC = 180 - 4x$ , making  $m\angle BDC = 3x$ . Since  $DC = BC$ ,  $m\angle DBC = 3x$ . Since  $\triangle ABC$  is isosceles,  $m\angle ECB = 3x$  and  $m\angle A + m\angle ABC + m\angle ACB = x + 3x + 3x = 7x$ . Thus,  $m\angle A = \frac{180}{7}$ .



3.  $x^2 + y^2 = 36^2$  and  $y^2 + 3^2 = AO^2 = OD^2 = (x + 3)^2$ .  
 Substituting  $(x + 3)^2 - 3^2$  for  $y^2$  in the first equation gives  
 $x^2 + 3x - 648 = 0 \rightarrow (x + 27)(x - 24) = 0$ .  
 Thus,  $x = 24$ .



### Round 4 – Algebra 2

- $\frac{1}{x} + \left(\frac{1}{x}\right)^2 = \frac{40}{9} \rightarrow 40x^2 - 9x - 9 = 0 \rightarrow (5x - 3)(8x + 3) = 0$
- For  $x > 0$ ,  $5x \leq 2x + 2 \rightarrow x \leq 2/3$ ; For  $-1 < x < 0$ ,  $-5x \leq 2x + 2 \rightarrow x \geq -2/7$ . For  $x \leq -1$ , no solution.
- Comparing  $(x - m)(x - n) = x^2 - (m + n)x + mn$  with  $(x - 2m)(x - 2n) = x^2 - 2(m + n)x + 4mn$  we see that each time we move to the next quadratic in the sequence the sum of the roots is doubled while the product is multiplied by 4. Thus, in  $q_7$  we have  $b = 3 \cdot 2^6 = 192$  and  $c = \frac{3}{2} \cdot 4^6 = 6144$ .  
 Answer (192, 6144).

### Round 5 – Analytic Geometry

- M(1, -4);  $m\overline{MC} = 6$ ;  $y - 8 = 6(x - 3)$ ;  $y = 6x - 10$  (6, -1, 10)
- By substitution, get  $6x^2 + x^4 - 18x^2 + 81 = 49 \rightarrow x^4 - 12x^2 + 32 = 0 \rightarrow x = \pm 2$  or  $x = \pm 2\sqrt{2}$ .  
 The points of intersection are (2, -5), (-2, -5),  $(2\sqrt{2}, -1)$ ,  $(-2\sqrt{2}, -1)$ . The bases of the trapezoid have lengths 4 and  $4\sqrt{2}$ , and the height is 4.
- Substituting  $kx^2$  for  $y$  we obtain  $k^2x^4 + (1 - 2k)x^2 = 0$ . Since  $x = 0$  is obviously a solution, divide by  $x^2$  to obtain  $k^2x^2 + (1 - 2k) = 0$ . This has two solutions if the discriminant is greater than 0. So,  $0^2 - 4k^2(1 - 2k) > 0$ . This is true if  $1 - 2k$  is negative, so  $1 - 2k < 0 \rightarrow k > 1/2$ .

### Round 6 – Trig and Complex Numbers

- $\sin\left(2\cos^{-1}\frac{3}{8}\right) = 2\sin\left(\cos^{-1}\frac{3}{8}\right)\cos\left(\cos^{-1}\frac{3}{8}\right) = 2\frac{\sqrt{55}}{8}\frac{3}{8}$

2. Using the quadratic formula, the solutions are  $2 \pm 2i$  and  $-1 \pm 3i$ .  $(2 + 2i)(-1 - 3i) = 4 - 8i$

3. Since  $(\sin x)(\cos x)(\tan x) = \frac{1}{4}$ , then  $(\sin x)(\cos x) \frac{\sin x}{\cos x} = \frac{1}{4} \rightarrow \sin^2 x = \frac{1}{4} \rightarrow \sin x = \frac{1}{2}$ . Thus,  $x = 30^\circ$  and since  $\tan 30^\circ = \frac{\sqrt{3}}{3} = .577 \dots$  and  $\cos 30^\circ = \frac{\sqrt{3}}{2} = .866 \dots$ , the longest side is  $\cos 30^\circ$ .

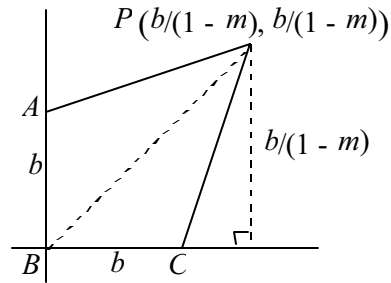
Let  $\theta$  be the angle opposite  $\cos 30^\circ$ . Then  $\left(\frac{\sqrt{3}}{2}\right)^2 = \left(\frac{1}{2}\right)^2 + \left(\frac{\sqrt{3}}{3}\right)^2 - 2\left(\frac{1}{2}\right)\left(\frac{\sqrt{3}}{3}\right)\cos\theta \rightarrow \cos\theta = \frac{-\sqrt{3}}{6}$ .

### Team Round

1.  $MN = \frac{\log_a b + \log_{b^2} a}{2} = \frac{\log_a b + \frac{1}{\log_a b^2}}{2} = \frac{\log_a b + \frac{1}{2 \log_a b}}{2}$ . Using the arithmetic mean-geometric mean inequality,  $MN \geq \sqrt{\log_a b \cdot \frac{1}{2 \log_a b}} = \frac{1}{\sqrt{2}}$ . Equality occurs when  $\log_a b = \log_{b^2} a$  which can't be since if  $AB = DC$  then  $ABCD$  is not a trapezoid. So while  $MN$  can't equal  $\frac{1}{\sqrt{2}}$ ,  $MN > \frac{1}{\sqrt{2}}$ , so  $\frac{\sqrt{2}}{2}$  is the greatest lower bound for  $MN$ .

2. Using  $x - y + 10 = 0$ ,  $x - y - 6 = 0$ , and center  $C(h, k)$ , then  $C$  is equidistant from the lines, giving  $\frac{|h - k + 10|}{\sqrt{2}} = \frac{|h - k - 6|}{\sqrt{2}}$  using the formula for the distance from a point to a line. Using  $h - k + 10 = -(h - k - 6)$  we obtain  $k = h + 2$ . Since the circle is tangent to the  $y$ -axis, the radius of the circle is  $h$ . Thus,  $\frac{|h - k + 10|}{\sqrt{2}} = h$  and letting  $k = h + 2$  we obtain  $\frac{|h - (h + 2) + 10|}{\sqrt{2}} = h \rightarrow \frac{8}{\sqrt{2}} = h$ . Thus,  $h = 4\sqrt{2}$ ,  $k = 4\sqrt{2} + 2$  and their sum is  $2 + 8\sqrt{2}$ . Note: had we set  $h - k + 10 = h - k - 6$  or  $-(h - k + 10) = -(h - k - 6)$ , we would have a negative answer for  $k$ .

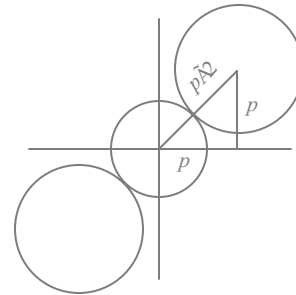
3. If  $f(x) = mx + b$ , then  $f^{-1}(x) = \frac{x - b}{m}$  and their point of intersection can be found by setting  $x = mx + b$  since they intersect on  $y = x$ . Thus  $x = \frac{b}{1 - m}$  and the point of intersection is  $\left(\frac{b}{1 - m}, \frac{b}{1 - m}\right)$ . Region  $R$  can be broken up into



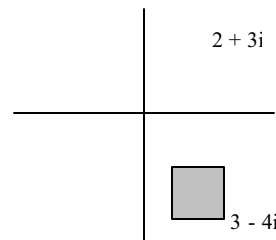
congruent triangles  $PAB$  and  $PCB$  which both have a base of  $b$  and a height of  $\frac{b}{1 - m}$ . The area of  $R$

is  $2\left(\frac{1}{2}b\right)\left(\frac{b}{1 - m}\right) = \frac{b^2}{1 - m} = 49$ . For  $m = \frac{9}{25}$ ,  $b^2 = \frac{16}{25} \cdot 49 \rightarrow b = \frac{28}{5}$ .

4. As shown in the diagram, when the circles are tangent, the distance between the centers is  $|p|\sqrt{2}$ . Thus,  $|p|\sqrt{2} = 4\sqrt{2} + 8\sqrt{2} \rightarrow |p| = 12$ . The system will have no real solution when the circles do not intersect. That occurs for  $p > 12$  or  $p < -12$  or  $-4 < p < 4$ .



5. The set of points for which  $|2 - c| \leq 1$  and  $|3 + d| \leq 1$  is the square defined by  $1 \leq c \leq 3$  and  $-2 \leq d \leq -4$ . As shown by the diagram the point furthest from the origin is  $3 - 4i$ .



6. The palindromes can't end in 00 or 50, so they end in either 25 or 75. This means that the palindromes are of the form  $52X25$  or  $57X75$  where  $X$  can represent any digit from 0 to 9. Thus, there are 10 numbers of the form  $52X25$  and 10 of the form  $57X75$ . Hence the sum of the 20 palindromes is  $20(50,000) + 10(2000) + 10(7000) + 10(20) + 10(70) + 20(5) + 100(2)(0 + 1 + 2 + \dots + 9)$ . This equals  $1,000,000 + 10(9090) + 100 + 200(45) = 1,100,000$ .